

Dr. A.N.KHOSLA DAV PUBLIC SCHOOL, ROURKELA

Holiday Homework for Summer Vacation

SESSION: (2025 – 26)

Class – II

ENGLISH

- ❖ Take a print out of the English worksheet given below. Do it and Paste it in your scrap book.

Find the names of animals hidden
in the following Sentences.

Example - Close the door at once. Ans - rat

1. In April I only came once. Ans -

2. She came late everyday. Ans -

3. He came to America today. Ans

4. He made errors in each one. Ans -

5. Do good workers succeed? Ans -

6. If I shout, he will hear me. Ans -

7. If Roger comes, we'll begin. Ans -

8. We will go at two o'clock. Ans -

9. I'll sing, you hum on keys. Ans -

10. He called Mikko a lazy boy. Ans -

- ❖ Make a mask of any animal
- ❖ Complete pages 1 to 15 of your English Handwriting Book.

EVS

Draw and colour the picture of any 5 good habits and make a collage of it

ODIA

1--ପରିବାର ଗଛ

ପରିବାର ଗଛ ଡିଆରିକରି ,ପରିବାର ସଦସ୍ୟଙ୍କ ଫଟୋ ଲଗାଇବେ ଓ ସେମାନଙ୍କ ନାମ ଲେଖିବେ (Do it in your scrap book) ।



























2-- Complete pages 1 to 10 of your Odia Handwriting book.

MATHS

Take a print out of the following two worksheets and do them .Paste them in your maths notebook after completion.



THE TABLE SHOWS NUMBER OF FOOD ITEMS.
READ AND ANSWER THE QUESTIONS CAREFULLY.

S.No.	Names of food items	Food Items
1.	APPLE	      
2.	CAKE	    
3.	ICE-CREAM	      
4.	JUICE	      

Q1:- Count and write the number of food item no.1

Answer:-_____

Q2:- Count and write the number of food item no.3

Answer:-_____

Q3:- Which food item is here the most in number ?

Answer:-_____


Q4:- Which food item is here the least in number ?

Answer:-_____

Q5:- Write the total number of food items.

Answer:-_____

Ordinal Numbers Activity



Colour the balloons as instructed below

blue	1st	6th	11th	16th		
red	2nd	3rd	7th	8th	12th	13th
yellow	4th	5th	9th	10th	14th	15th



HINDI

दिए गए चित्र को ध्यान से देखें और उसमें दिखने वाले चित्रों के नाम लिखें। (Take a Print out of it and paste it in your scrap book.).Also Complete pages 1 to 10 of your Hindi Handwriting book.



STEM ACTIVITY

Go through the following link and make a running rabbit

<https://youtube.com/shorts/aKtX-cKH68c?si=5Ob6ZUrV90y1aKmZ>